

**Class 6 | Science**

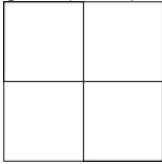
Natural resources are of two types - renewable and non-renewable. Which one of the following is a renewable natural resource?

- A. Natural gas
- B. coal
- C. Petroleum
- D. Trees

---

**Yesterday's Question | Class 6 | Maths**

The length of each side of each SMALL square in this grid is 4 cm. The area of this grid (in square cm) will be



- A. 4
- B. 8
- C. 16
- D. 64

Correct Answer : **D**

**Class 7 | Science**

The blood temperature of warm-blooded animals

- A. is more than the blood temperature of cold-blooded animals.
- B. increases in summer and decreases in winter.
- C. remains the same throughout the year.
- D. decreases in summer and increases in winter.

---

**Yesterday's Question | Class 7 | Maths**

123450 is NOT divisible by:

- A. 2
- B. 3

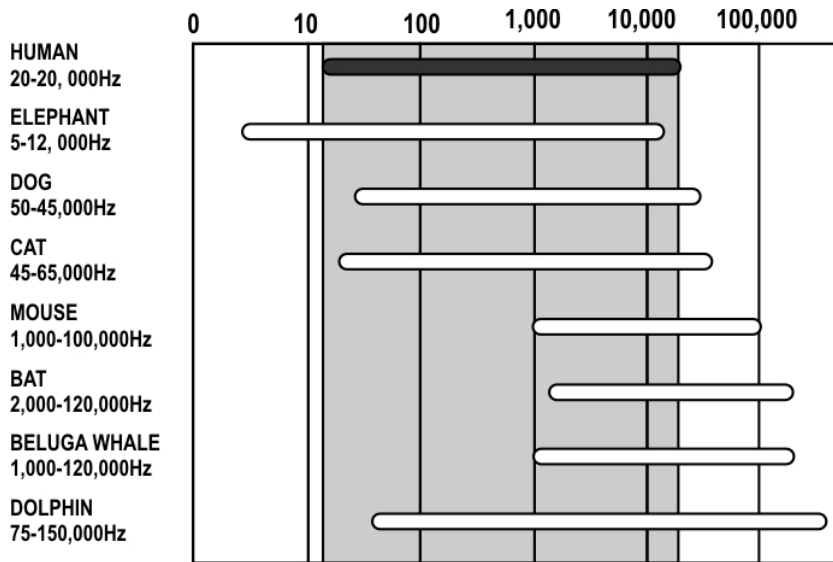
C. 9

D. 15

Correct Answer : C

### Class 8 | Science

Study the graphic depicting the range of frequencies different animals can hear. Note that the horizontal scale is not a linear scale.



Which of these correctly depicts the animals having the highest audible range of frequencies?

- A. Dolphin > Beluga Whale > Bat
- B. Dolphin > Elephant > Cat
- C. Dolphin > Elephant > Human
- D. Dolphin > Bat > Cat

---

### Yesterday's Question | Class 8 | Maths

$$2.36 \times 0.065 = 0.1534$$

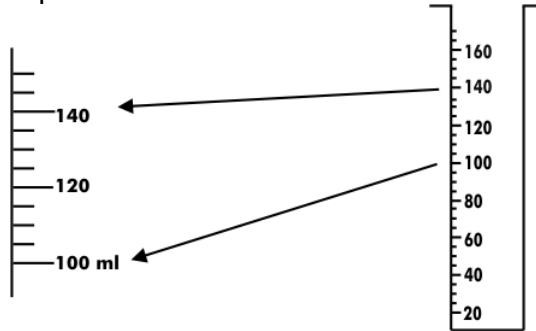
Which of the following will have a value close to 15?

- A.  $0.236 \times 0.0065$
- B.  $2.36 \times 0.0065$
- C.  $23.6 \times 0.65$
- D.  $236 \times 6.5$

Correct Answer : C

## Class 8 | Maths

A part of one side of a vessel is shown below.



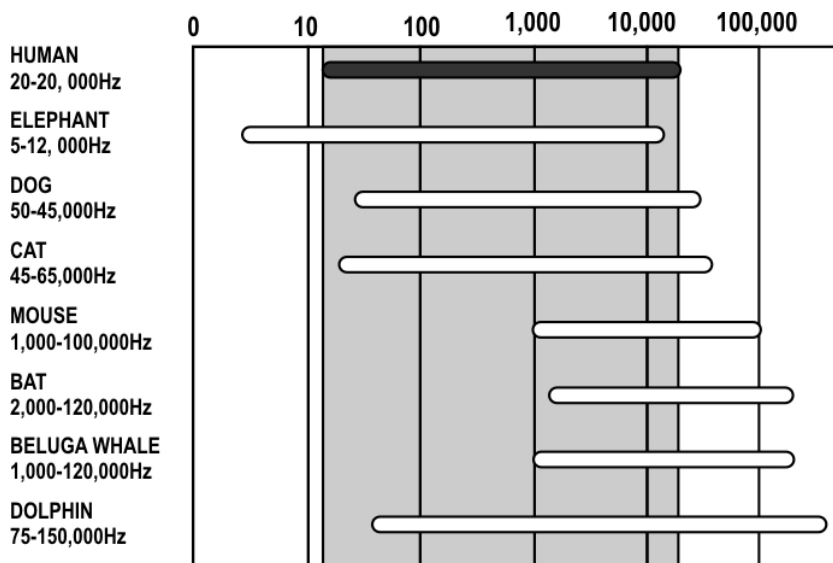
Using this beaker which of these measurements can be made EXACTLY?

- A. 121.5 ml
- B. 124 ml
- C. 125 ml
- D. 128 ml

---

## Yesterday's Question | Class 8 | Science

Study the graphic depicting the range of frequencies different animals can hear. Note that the horizontal scale is not a linear scale.



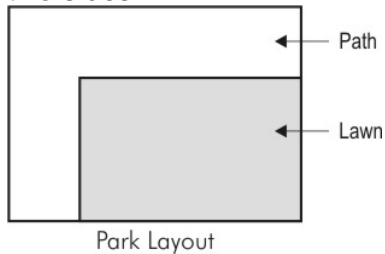
Which of these correctly depicts the animals having the highest audible range of frequencies?

- A. Dolphin > Beluga Whale > Bat
- B. Dolphin > Elephant > Cat
- C. Dolphin > Elephant > Human
- D. Dolphin > Bat > Cat

Correct Answer : **A**

### Class 7 | Maths

A rectangular park consists of a rectangular lawn with a path of uniform width on two sides.



If the boundary of the entire park is 12 meters longer than of the lawn, what is the width of the path?

- A. 1.5 m
- B. 3 m
- C. 6 m
- D. Can't say from the given data

---

### Yesterday's Question | Class 7 | Science

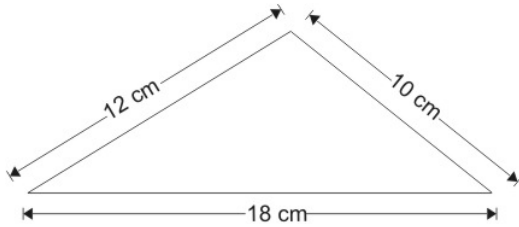
The blood temperature of warm-blooded animals

- A. is more than the blood temperature of cold-blooded animals.
- B. increases in summer and decreases in winter.
- C. remains the same throughout the year.
- D. decreases in summer and increases in winter.

Correct Answer : **C**

### Class 6 | Maths

A triangular frame of wire shown below was straightened and cut into 4 equal pieces. Each piece was then bent to form a square frame.



What is the side of each square frame thus formed?

- A. 2.5 cm
- B. 3.3 cm
- C. 5 cm
- D. 10 cm

---

### Yesterday's Question | Class 6 | Science

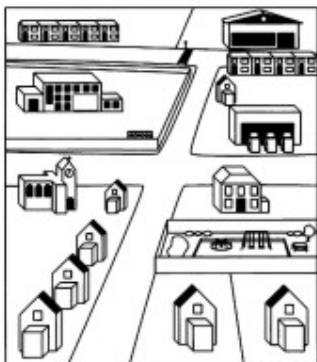
Natural resources are of two types - renewable and non-renewable. Which one of the following is a renewable natural resource?

- A. Natural gas
- B. coal
- C. Petroleum
- D. Trees

Correct Answer : **D**

### Class 6 | Social Studies

Shown here is the drawing of a place in Nagpur. Look at it very carefully.



Which of the maps show the above place correctly?





### Yesterday's Question | Class 6 | Science

If the diameter of the Earth had been 1 mm, the diameter of Uranus would have been 4.1 mm.



Earth

Which of the following would BEST represent Uranus if the size of Earth is as shown above?



Correct Answer : A

### Class 7 | Social Studies

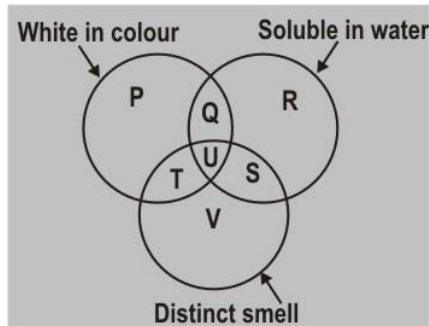
In 2001, United States had fought a war against Afghanistan. It included armed combat on land. To succeed in this operation, American soldiers had to be well-trained to endure a particular terrain which dominates the Afghanistan landscape. Which terrain could it be?

- A. rugged mountains
- B. coastal lagoons
- C. thick rainforests
- D. marshy deltas

---

### Yesterday's Question | Class 7 | Science

The three circles represent three types of substance as indicated.



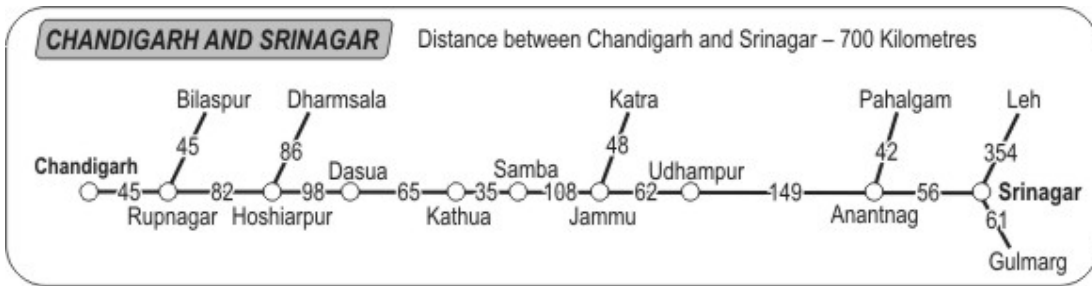
In which region of this figure should common salt be placed?

- A. p
- B. Q
- C. R
- D. S

Correct Answer : **B**

### Class 8 | Social Studies

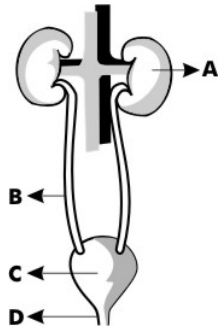
Use this map to find out which of these places is farthest from Srinagar.



- A. Leh
- B. Pahalgam
- C. Katra
- D. Udhampur

**Yesterday's Question | Class 8 | Science**

In the diagram shown below of the human urinary system, the function of separating urea from blood to form urine is carried out by the organ marked:



- A. A
- B. B
- C. C
- D. D

Correct Answer : **A**

**Class 6 | English**

"Namita did not know the answer to the question in the test. But she decided to take a risk and guess the answer."

Which of the following idioms can replace the underlined part of the above sentence?

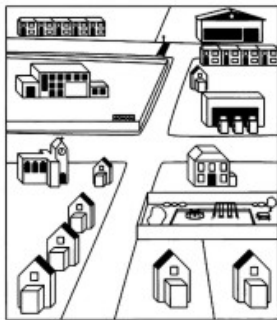
- A. to be in the dark.
- B. to keep her teachers in the dark.



- C. to take a shot in the dark.
- D. to face dark days.

**Saturday's Question | Class 6 | Social Studies**

Shown here is the drawing of a place in Nagpur. Look at it very carefully.



Which of the maps show the above place correctly?

A. A.

B. B.

C. C.

D. D.

Correct Answer : C

**Class 7 | English**

Which of the following sentences needs to be corrected?

- A. Beena and Sneha are learning to make clay models.
- B. Beena makes statues of animals that look beautiful.

- C. Sneha makes equally beautiful statues.
- D. Do you think their statues looks alike?

---

### Saturday's Question | Class 7 | Social Studies

In 2001, United States had fought a war against Afghanistan. It included armed combat on land. To succeed in this operation, American soldiers had to be well-trained to endure a particular terrain which dominates the Afghanistan landscape. Which terrain could it be?

- A. rugged mountains
- B. coastal lagoons
- C. thick rainforests
- D. marshy deltas

Correct Answer : **A**

### Class 8 | English

'The crowded bus bursting at every stage, crawled heavily to a stop with a groan.'

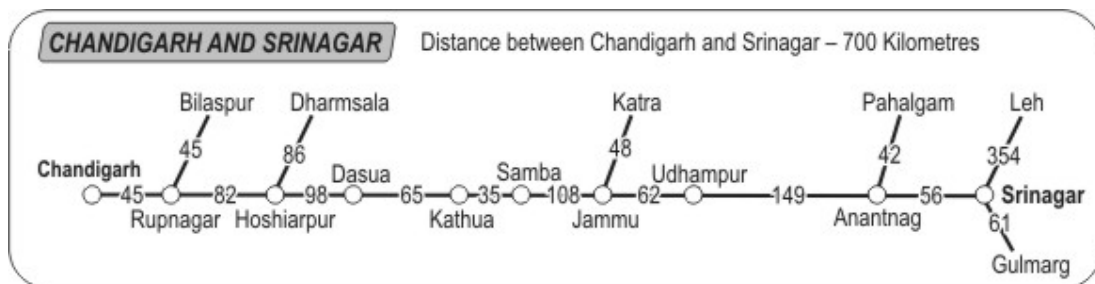
What is the figure of speech used here?

- A. simile (expresses resemblance between things of different kinds usually using 'like' or 'as')
- B. metaphor (expression used to refer to something it does not literally denote)
- C. alliteration (same starting sound in different words of a line)
- D. personification (attributing human characteristics to inanimate objects)

---

### Saturday's Question | Class 8 | Social Studies

Use this map to find out which of these places is farthest from Srinagar.



- A. Leh
- B. Pahalgam
- C. Katra
- D. Udhampur

Correct Answer : **A**

